
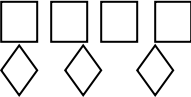





September 2015

1st grade

Sunday	Monday	Tuesday	Wednesday	Thursday	Friday	Saturday
		1 Start counting at 12 and end at 20.	2 Jan has 2 cats and 3 dogs. How many animals does she have?	3 Start counting at 13 and end at 26.	4 Count by 10s to 100.	5 Write the number that shows how many shapes you see. 
6 What does the word EQUAL mean?	7 Is 5 more than 8 or less than 8?	8 Count by 2s. Write the missing numbers 2, 4, 6, _____	9 Write the numbers 1-10	10 Start counting at 16 and end at 37.	11 Mark is the first person in line. Marla is second. Ann is next in line. What place in line is Ann?	12 3 + 7 = 2 + 4 = 4 + 4 = 6 + 4 =
13 Circle the numbers that add up to ten in these equations. 1 + 9 + 4 = 4 + 3 + 7 = 1 + 6 + 4 =	14 Sam has 4 baseballs and 3 footballs. How many balls does he have?	15 Count to 100 by groups of 5.	16 Are these sets equivalent? 	17 Morgan has 6 donuts and Mike has 2 donuts. How many more donuts does Morgan have?	18 Write three addition problems that have a sum of 10.	19 Cara was fourth behind the first person in line. What was her place?
20 If you double four, how many do you have?	21 Write the numeral that shows how many people are in your family.	22 8 + ___ = 8 8 - ___ = 8 7 + 0 = ___ 7 - ___ = 7	23 Sue has 6 beads. Some are red and some are blue. How many of each could she have?	24 Draw a smiley face to the right of the star. 	25 What does the word DIFFERENCE mean?	26 Draw a picture that has an equal number of stars and squares.
27 Ten birds sat on a tree. Four birds flew away. How many birds are left?	28 Which month comes after September?	29 In the summer, would a thermometer read 95 degrees or 45 degrees?	30 How many letters are in your first and last name?			