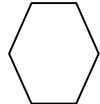
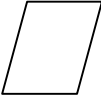
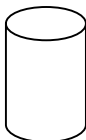




December 2015

1st grade



Sunday	Monday	Tuesday	Wednesday	Thursday	Friday	Saturday
		1 Write a number sentence. Jan has 11 crayons. He gives 4 away. How many are left?	2 How many bundles of ten are in the number 34?	3 Which two numbers come between 69 and 72?	4 Name this shape. 	5 Would you go to bed at 8:00 am or 8:00 pm?
6 Count by 5's to 100.	7 What comes next? AA, AB, AC, ____	8 What is the date of the 3rd Tuesday of December?	9 Name this shape 	10 Is 35 an even number or odd number?	11 If you double the number 7, what number do you have?	12 $2+7+1=$
13 Dana is in line behind Mary. Mary is second in line. What place in line is Dana?	14 Name an object that is a cylinder.	15 Make a picture using a square and a triangle.	16 What number is half of 10?	17 $6+4+5=$	18 What comes next? 44, 45, 46, ____	19 Name this shape. 
20 $12-2=$	21 I have 4 dimes and 3 nickels. How much money do I have?	22 Is 28 an even or odd number?	23 What day of the week is December 10?	24 John has 4 donuts, he gives Sally 3. How many donuts does he have left?	25 $8+3+1=$	26 What number is half of 8?
27 How many months are in a year?	28 If you double the number 8, what number do you have?	29 How many ones are in the number 8?	30 How could you equally share 4 cookies with a friend?	31 What month comes after December?		