
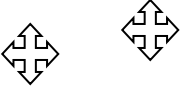




Sunday	Monday	Tuesday	Wednesday	Thursday	Friday	Saturday
1 I have 72 pieces of candy. I want to divide them between me and my three friends. How many pieces will we receive?	2 Lilly went to a movie that started at 4:35 and it ended at 6:10, how long was the movie?	3 $693 - n = 448$	4 $4 \times 14 =$ $20 \times 8 =$ $40 \times 9 =$ $50 \times 10 =$	5 Which inequality is true? a. $12 + 4 > 7 + 9$ b. $10 + 8 < 10 - 2$ c. $15 - 7 > 12 - 6$	6 Sam went to Tuscaloosa. It took him 30 min. to drive there. If he drove at 60 miles per hour, how many miles did he drive?	7 How many quarts are in a gallon? How many cups are in a gallon?
8 List the factors for 36.	9 Order these numbers from least to greatest: 10,887; 10,012; 10,991	10 Seven girls, 13 boys, & 20 adults want to see the lights at the lake. If each car holds 5 people, how many cars do they need?	11 What is the perimeter? 7 in 6 in 	12 Draw a right, acute and obtuse angle.	13 Ron left school at 4:30p.m. and arrived home at 6:13p.m. How long did it take him to get home?	14 Ms. Jones teaches 300 minutes each day. How many hours does she teach?
15 I want to build a fence with the area of 24 inches. Show two difference ways this can be made.	16 Similar or congruent? 	17 Frank scored 6,243 points on Monday, 5,732 on Tuesday and 3,567 on Wednesday. What is the total number of points Frank scored?	18 Does this shape have a line of symmetry?  Explain.	19 Mrs. Wells & Ms. Bow each bought two pairs of shoes. Each pair cost \$21.95. How much did they spend in all?	20 $45 / 9 =$ $54 / 6 =$ $64 / 8 =$	21 $178 + 2387 = n$ $254 + 999 = n$
22 I have 3 quarters, 2 dimes, and 24 pennies. How much money do I have?	23 Round 419 to the nearest hundred. Round 821 to the nearest ten.	24 Which inequality is true? d. $12 + 4 > 7 + 9$ e. $10 + 8 < 10 - 2$ f. $15 - 7 > 12 - 6$	25 What is the area?  6in	26 $24 \div 6 = n$	27 Mary collected 54 stamps. The page protectors will hold 9 stamps. How many page protectors will she need?	28 $1,2765$ $- \underline{567}$
29 I have 30 yards of fencing. I want to build a rectangular fence. What would my fence look like? Label the dimensions.	30 My cabinet will hold 36 jars of soup. I can add and remove shelves. List 3 different ways I can organize my cabinet.					