







December 2015

Kindergarten

Sunday	Monday	Tuesday	Wednesday	Thursday	Friday	Saturday
		1 Clap and pat a pattern using: AABB	2 Count the windows in your house.	3 What are the days of the week?	4 How many more days are left in December?	5 Identify this shape. 
6 Is 4 closer 2 or 8?	7 What is missing? 13, 14, ___16	8 Find a square in your house.	9 Count aloud for someone to 100.	10 $5-3=$	11 Draw 8 snowmen.	12 How many corners does a square have?
13 Draw 10 triangles.	14 Identify this shape. 	15 What number comes after 5?	16 Find a rhombus in your house.	17 Paul had 5 candy canes. Peter had 3 candy canes. How many candy canes did they have all together?	18 Identify this shape. 	19 $5+2=$
20 Find a triangle in your house.	21 What month comes after December?	22 How many pairs of feet are in your family?	23 Clap, pat, and stomp a pattern using: AABBCC	24 What is the temperature outside?	25 Find an oval in your house.	26 What season is it?
27 Identify this shape. 	28 $4+3=$	29 What month comes after December?	30 What comes after 6?	31 Happy New Year's Eve!		