




# Grade 3 NOVEMBER 2015

Sunday	Monday	Tuesday	Wednesday	Thursday	Friday	Saturday																		
1 Beth is planning a party to invite 14 friends. She has 3 tables. How many people can sit at each table?	2 Subtract  546 - 290= 433 - 218=	3 Kevin has \$25. He bought a shirt for \$14.95 and socks for \$1.80.  a. How much did he spend? b. How much does he have left?	4 Jake left home at 3:30 and has to be back in two hours. What time does Jake need to be home?	5 Round 24 to the nearest ten.	6 Tara has one dozen roses. If she gives away half of her roses, how many will she have left?	7 The bakery baked 437 cookies on Monday. They sold 389 during the week. How many cookies are leftover? Which number sentence is correct to solve this? a. 437+389= b. 389+___=437																		
8 How many days are there until Thanksgiving?	9 How many more do I need to add to equal 10? a. 6 + x = 10 b. x + 2 = 10 c. 4 + x = 10	10 There are 9 cars in the parking lot. Each car has 4 doors. How many car doors are in the parking lot?	11 Veteran's Day!	12 The teacher collected 356 books. He gave 189 to students. How many does he have left?	13 Draw an array that shows 3 x 6	14 Is this a slide, a flip, or a turn?  																		
15 Xavier has 3 quarters, 2 dimes, and 4 pennies. How much money does he have?	16 The Lions scored 42 points in the football game. The Eagles scored 26 points. What is the difference in the number of points each team scored?	17 Create a bar graph: Turkey: 5 students Dressing: 10 students Sweet Potato Casserole: 7 students Pecan Pie: 9 students	18 Put these numbers in order from least to greatest:  23, 856, 410, 865	19 Which ten is 49 closest to: 40 or 50?  Which hundred is 237 closest to: 200 or 300?	20 Draw an array to show how 6x4 is the same as 8x3.	21 Write a story problem to support 7 times 5.																		
22 If a rectangle has two sides measuring 3 inches each and two sides measuring 5 inches each, what is the perimeter?	23 The time is 10:18 a.m. How long is it until 11:30 a.m.?	24 Skip count by 5's but start with 7. Count until you reach 77.	25 Charles plays wheelchair basketball. If he and his four friends all have four wheels on their chairs, how many wheels are on the floor at one time?	26  HAPPY THANKSGIVING 	27 Mom made 24 cookies for dessert. Each person could have 3. a. There are 3 people. How many cookies are eaten? b. After those cookies were eaten, how many cookies were left?	28 Label the array and tell how many squares in all. <table><tr><td></td><td></td><td></td><td></td><td></td><td></td></tr><tr><td></td><td></td><td></td><td></td><td></td><td></td></tr><tr><td></td><td></td><td></td><td></td><td></td><td></td></tr></table>																		
29 3x4= 5x4= 6x4=	30 What is the date that is 2 weeks past December 14th?																							